

Welcome to the Carranballac Corker. This is the weekly Family Learning Activity Page. Discuss the challenges and place your completed sheet in the box near the office. The correct winning entries will be drawn at the whole assembly on Monday mornings.

Word of the Week: Write a definition for the following.

Formula: _____

Last Week's word. Skip Counting: counting forwards or backwards in multiples or intervals of a given number.

Early Years:


Santa has 207 elves working for him all year round. At Christmas, he employ 156 more. How many elves does he have in total?







Name: _____ Grade: _____

Middle Years:

A garden centre keeps a record of how many Christmas trees they sell each day. Each Christmas

tree  = 15 Christmas trees sold

10 th Dec	
11 th Dec	
12 th Dec	
13 th Dec	

How many trees were sold on the 10th Dec?
How many more trees were sold on the 13th December than 12th December?

Name: _____ Grade: _____


Family Fun Time:

Get into the spirit of Christmas and sing Christmas songs with your family or go for a night drive and look at the Christmas decorated houses!



Previous Week's Answers

Early Years:



Middle Years:

It will take him 28 days to escape.
After 27 days and nights the frog only has 3m to go.
On the 28th day the frog is able to jump clear.